

Mathematics


TEST 1

Marks: 40

Time: 60 minutes

I. Look at the picture and answer the questions.

(4)

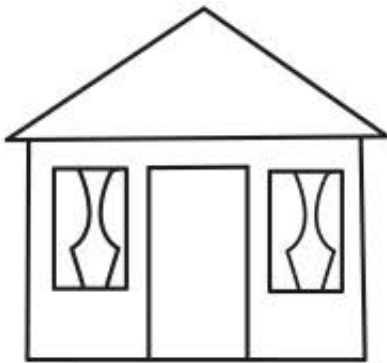


- I.1 How many balls are there? _____
- I.2 How many groups of 4 balls are there? _____
- I.3 How many groups of 5 balls are there? _____
- I.4 How many groups of 10 balls are there? _____

14. Arrange the units of measure from smallest to largest. (1)

mm km m cm

15. Use your ruler to measure the height of the house from floor to roof. (1)



The house is _____ cm high.

16. Look at the line lengths below, and complete the sentences. (3)

Line A _____

Line B _____

Line C _____


Line D _____

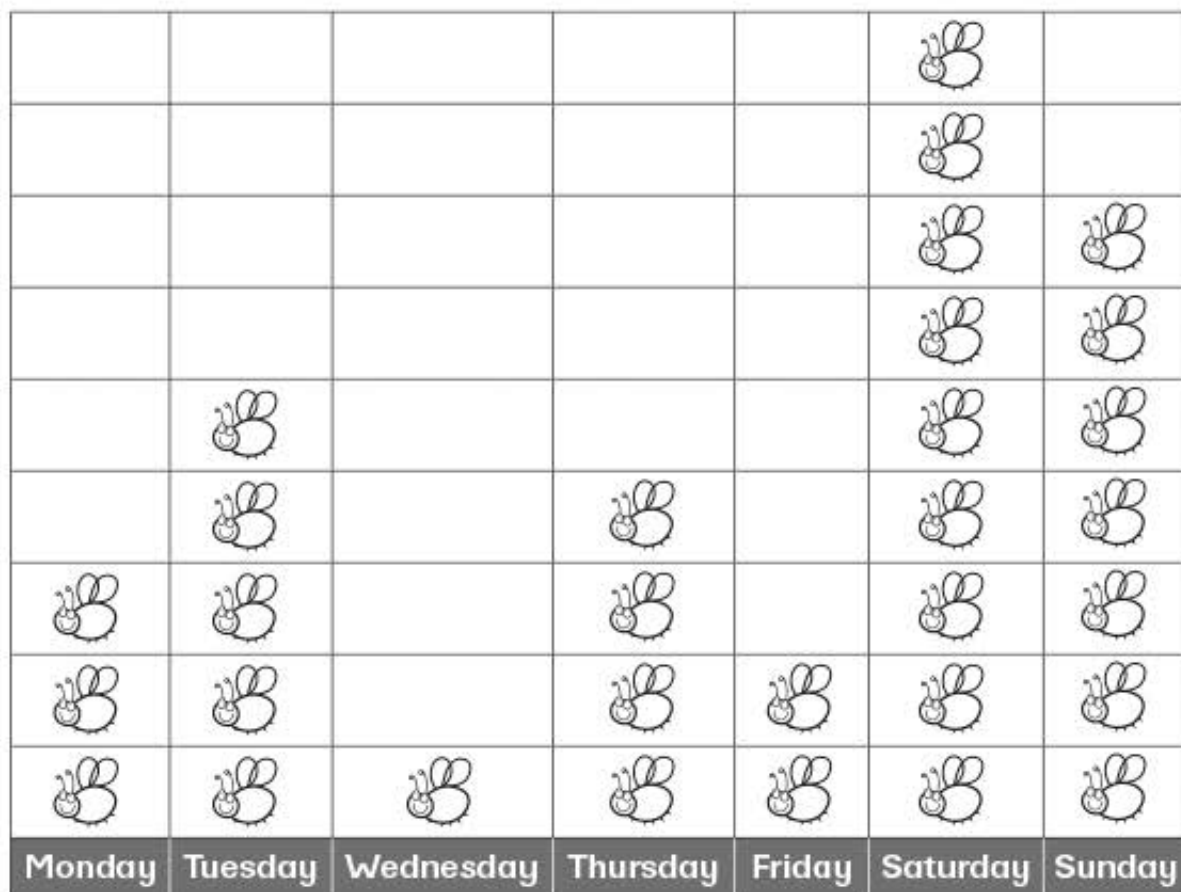
16.1 Line _____ is the longest.

16.2 Line _____ is the shortest.

16.3 Line _____ and line _____ are longer than line C.

17. Jody likes to collect bugs. She has had a busy week of bug collecting! Look at the pictograph and answer the questions. (2)

Key:  = 1 bug



- 17.1 How many bugs did Jody find on Thursday? _____
- 17.2 How many bugs did she find on Saturday? _____
- 17.3 On which day did she find the most bugs? _____
- 17.4 How many more bugs did she find on Sunday than on Wednesday?
