

Wiskunde

TOETS 1

Punte: 40

Tyd: 60 minute

I. Vul die ontbrekende getalle in. (4)

1.1

1	2			5		7	8		10
---	---	--	--	---	--	---	---	--	----

1.2

10	20		40		60			90	100
----	----	--	----	--	----	--	--	----	-----

Verbind die regte woord en getal met 'n lyn. (3)

ses	4
vier	10
tien	6

3. Tel die sterre. Skryf die getal in die kassie regs. (3)

3.1

★ ★ ★ ★ ★ ★ ★	
---------------	--

3.2


★ ★ ★ ★ ★ ★ ★ ★ ★ ★ ★	
-----------------------	--

3.3

★ ★ ★	
-------	--

4. Kyk na die huisies.

(4)



4.1 Kleur die eerste huisie rooi in.

4.2 Kleur die derde huisie blou in.

4.3 Kleur die laaste huisie groen in.

4.4 Kleur die vyfde huisie geel in.

5. Voltooi die getallesinne.

(4)

5.1

$$14 + 3 = \square$$

5.2

$$8 - 2 = \square$$

$$24 + 3 = \square$$

$$18 - 2 = \square$$

$$34 + 3 = \square$$

$$28 - 2 = \square$$

$$\square + 3 = \square$$

$$\square - 2 = \square$$

6. Halveer die getalle.

(3)

6.1 Die helfte van 6 is \square .

6.2 Die helfte van 8 is \square .

6.3 Die helfte van 10 is \square .

7. Verdubbel die getalle.

(3)

7.1 Dubbel 2 is \square .


7.2 Dubbel 4 is \square .

7.3 Dubbel 10 is \square .

8. Tel die voëltjies in die raampie.

(2)

8.1 Omkring 8 voëls.




8.2 Hoeveel voëls is oor?


9. Voltooi die patrone.

(2)

9.1



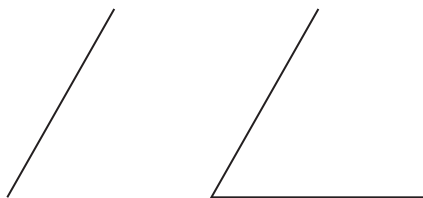
9.2




10. Wat volg?

(2)

10.1



10.2




11. Trek 'n lyn van elke sin na die regte prentjie.

(4)


11.1 Stinkie sit langs sy hok.

a.




11.2 Stinkie sit agter sy hok.

b.




11.3 Stinkie sit binne sy hok.

c.




11.4 Stinkie sit voor sy hok.

d.





12. Is die bal binne-in die boks? Omkring die regte antwoord. (1)



ja nee

13. Rangskik die prentjies van jongste na oudste. Skryf 1, 2, 3. (3)



14. Trek 'n kruisie (x) binne-in al die sirkels. (2)

